

CBSE 10 MATHS / REVISION TEST 3

Instructions :

This question paper consists of 30 questions divided into 4 sections- A , B , C and D. Section A contains 7 questions of 1 mark each. Section B consists contains 6 questions of 2 marks each, Section C contains 10 questions of 3 marks each and section D contains 8 questions of 4 marks each

You are not permitted to use a calculator

SECTION A

(Each question in this section carries one mark)

Question 1

If $x = 3$ is one root of the quadratic equation $x^2 - 2kx - 6 = 0$, then find the value of k .

Answer : $\frac{1}{2}$

Question 2

What is the HCF of smallest prime number and the smallest composite number ?

Answer : 2

Question 3

Find the distance of a point $P(x, y)$ from the origin.

Answer: $\sqrt{x^2 + y^2}$

Question 4

In an AP, if the common difference $(d) = -4$, and the seventh term (a_7) is 4, then find the first term.

Answer : 28

Question 5

What is the value of $(\cos^2 67^\circ - \sin^2 23^\circ)$?

Answer : 0

Question 6

Given $\Delta ABC \sim \Delta PQR$, if $\frac{AB}{PQ} = \frac{1}{3}$, then find $\frac{\text{ar } \Delta ABC}{\text{ar } \Delta PQR}$.

Answer : $\frac{1}{9}$

SECTION B

(Each question in this section carries two mark)

Question 7

Given that $\sqrt{2}$ is irrational, prove that $(5 + 3\sqrt{2})$ is an irrational number.

Question 8

In Fig. 1, ABCD is a rectangle. Find the values of x and y .

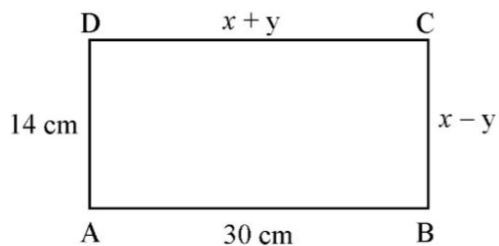


Fig. – 1

Answer : $x = 22$: $y = 8$

Question 9

Find the sum of first 8 multiples of 3.

Answer : 108

Question 10

Find the ratio in which P(4, m) divides the line segment joining the points A(2, 3) and B(6, -3). Hence find m.

Answer : 1 : 1 ; m = 0

Question 11

Two different dice are tossed together. Find the probability :

- (i) of getting a doublet
- (ii) of getting a sum 10, of the numbers on the two dice.

Answer : (i) 1/6 (ii) 1/12

Question 12

An integer is chosen at random between 1 and 100. Find the probability that it is :

- (i) divisible by 8.
- (ii) not divisible by 8.

Answer : (i) 6/49 (ii) 43/49

SECTION C

(Each question in this section carries three marks)

Question 13

Find HCF and LCM of 404 and 96 and verify that $\text{HCF} \times \text{LCM} = \text{Product of the two given numbers}$.

Answer : HCF = 4 , LCM = 9696

Question 14

Find all zeroes of the polynomial $(2x^4 - 9x^3 + 5x^2 + 3x - 1)$ if two of its zeroes are $(2 + \sqrt{3})$ and $(2 - \sqrt{3})$.

Answer : 1 , $-\frac{1}{2}$, $2 + \sqrt{3}$, $2 - \sqrt{3}$

Question 15

If A(-2, 1), B(a, 0), C(4, b) and D(1, 2) are the vertices of a parallelogram ABCD, find the values of a and b. Hence find the lengths of its sides.

Answer : $\sqrt{10}$

OR

If A(-5, 7), B(-4, -5), C(-1, -6) and D(4, 5) are the vertices of a quadrilateral, find the area of the quadrilateral ABCD.

Answer : 72 unit²

Question 16

A plane left 30 minutes late than its scheduled time and in order to reach the destination 1500 km away in time, it had to increase its speed by 100 km/h from the usual speed. Find its usual speed.

Answer : 500 km/h

Question 17

Prove that the area of an equilateral triangle described on one side of the square is equal to half the area of the equilateral triangle described on one of its diagonal.

OR

If the area of two similar triangles are equal, prove that they are congruent.

Question 18

Prove that the lengths of tangents drawn from an external point to a circle are equal.

Question 19:

If $4 \tan \theta = 3$, evaluate $\left(\frac{4 \sin \theta - \cos \theta + 1}{4 \sin \theta + \cos \theta - 1} \right)$

Answer: 13/11

OR

If $\tan 2A = \cot (A - 18^\circ)$, where $2A$ is an acute angle, find the value of A .

Answer : 36°

Question 20

Find the area of the shaded region in Fig. 2, where arcs drawn with centres A, B, C and D intersect in pairs at mid-points P, Q, R and S of the sides AB, BC, CD and DA respectively of a square ABCD of side 12 cm. [Use $\pi = 3.14$]

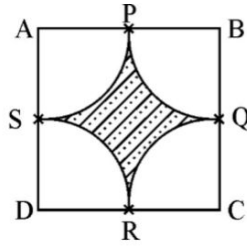


Fig. – 2

Answer : 30.96 cm²

Question 21

A wooden article was made by scooping out a hemisphere from each end of a solid cylinder, as shown in Fig. 3. If the height of the cylinder is 10 cm and its base is of radius 3.5 cm. Find the total surface area of the article.

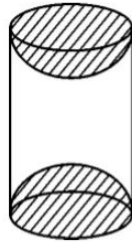


Fig. 3

Answer : 374 cm²

OR

A heap of rice is in the form of a cone of base diameter 24 m and height 3.5 m. Find the volume of the rice. How much canvas cloth is required to just cover the heap ?

A heap of rice is in the form of a cone of base diameter 24 m and height 3.5 m. Find the volume of the rice. How much canvas cloth is required to just cover the heap ?

Answer : $V = 528 \text{ m}^3$, $CSA = 471.4 \text{ m}^2$

Question 22

The table below shows the salaries of 280 persons :

Salary (In thousand ₹)	No. of Persons
5 – 10	49
10 – 15	133
15 – 20	63
20 – 25	15
25 – 30	6
30 – 35	7
35 – 40	4
40 – 45	2
45 – 50	1

Calculate the median salary of the data.

Answer : Rs 13,420 (approx.)

SECTION D

(Each question in this section carries four marks)

Question 23

A motor boat whose speed is 18 km/hr in still water takes 1hr more to go 24 km upstream than to return downstream to the same spot. Find the speed of the stream.

Answer : 6 km/h

OR

A train travels at a certain average speed for a distance of 63 km and then travels at a distance of 72 km at an average speed of 6 km/hr more than its original speed. If it takes 3 hours to complete total journey, what is the original average speed ?

Answer : 42 km/h

Question 24

The sum of four consecutive numbers in an AP is 32 and the ratio of the product of the first and the last term to the product of two middle terms is 7 : 15. Find the numbers.

Answer : {2 , 6 , 10 , 14} or { 14,10 , 6 , 2 }

Question 25

In an equilateral ΔABC , D is a point on side BC such that $BD = \frac{1}{3} BC$. Prove that

$$9(AD)^2 = 7(AB)^2$$

Question 26

Draw a triangle ABC with $BC = 6$ cm, $AB = 5$ cm and $\angle ABC = 60^\circ$. Then construct a triangle whose sides are $\frac{3}{4}$ of the corresponding sides of the ΔABC .

Question 27

Prove that : $\frac{\sin A - 2 \sin^3 A}{2 \cos^3 A - \cos A} = \tan A$.

Question 28

The diameters of the lower and upper ends of a bucket in the form of a frustum of a cone are 10 cm and 30 cm respectively. If its height is 24 cm, find :

- (i) The area of the metal sheet used to make the bucket.
- (ii) Why we should avoid the bucket made by ordinary plastic ? [Use $\pi = 3.14$]

Answer : (i) 1711.3 cm² (ii) It is not degradable

Question 29

As observed from the top of a 100 m high light house from the sea-level, the angles of depression of two ships are 30° and 45° . If one ship is exactly behind the other on the same side of the light house, find the distance between the two ships. [Use $\sqrt{3} = 1.732$]

Answer : 73.2 m

Question 30

The mean of the following distribution is 18. Find the frequency f of the class 19 – 21.

Class	11-13	13-15	15-17	17-19	19-21	21-23	23-25
Frequency	3	6	9	13	f	5	4

Answer : f = 8

OR

The following distribution gives the daily income of 50 workers of a factory :

Daily Income (in ₹)	100-120	120-140	140-160	160-180	180-200
Number of workers	12	14	8	6	10

Convert the distribution above to a less than type cumulative frequency distribution and draw its ogive.

(Graph)